





Circle the answers to the questions. Look at the Family Chart for help.



Who is older?

-  Aunt
-  Cousins

Who is older?

-  Mom
-  Baby




Who is younger?

-  Dad
-  Brother

Who is oldest?

-  Dad
-  Sister
-  Baby

Who is youngest?

-  Grandpa
-  Grandma
-  Uncle

Family Chart

